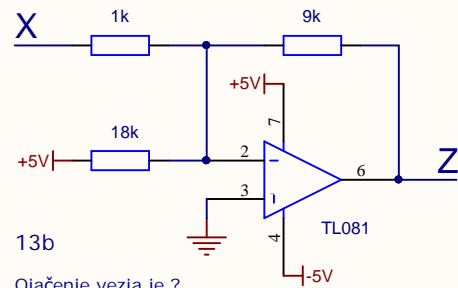


13a

Ojačenje vezja je ?

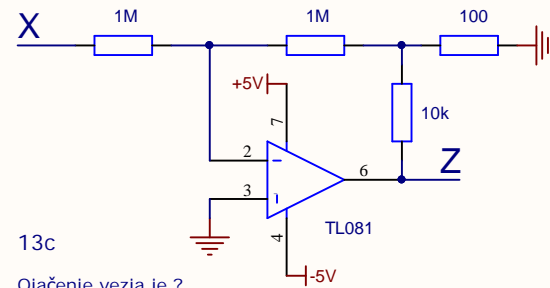
Največja amplituda vhodnega signala je ?



13b

Ojačenje vezja je ?

Največja amplituda vhodnega signala je ?

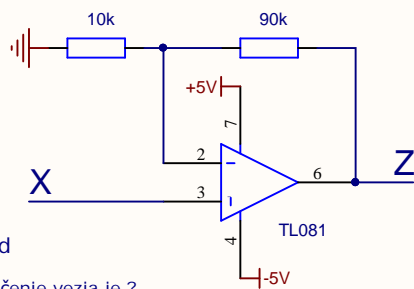


13c

Ojačenje vezja je ?

Največja amplituda vhodnega signala je ?

Navedi prednosti in slabosti vezja 13c proti 13a

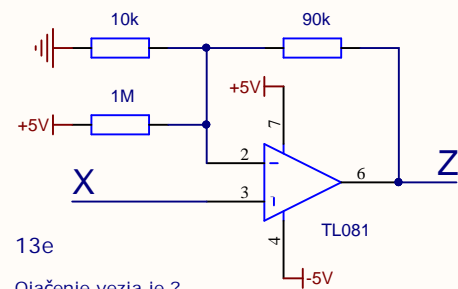


13d

Ojačenje vezja je ?

Največja amplituda vhodnega signala je ?

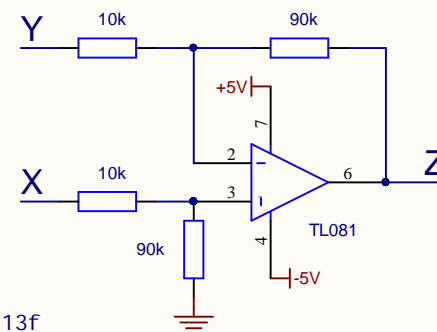
Navedi prednosti in slabosti vezja 13d proti 13a



13e

Ojačenje vezja je ?

Največja amplituda vhodnega signala je ?

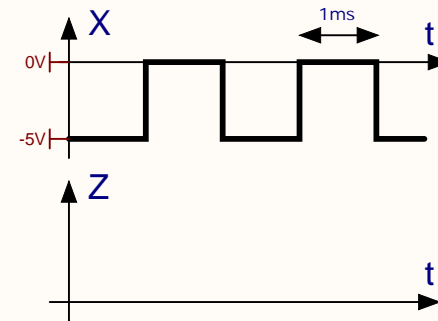
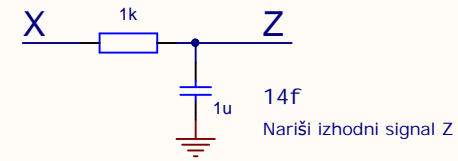
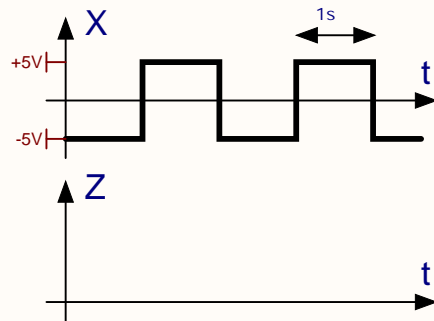
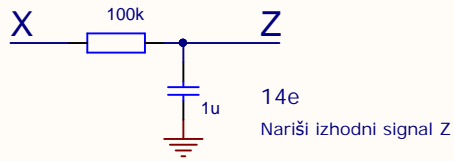
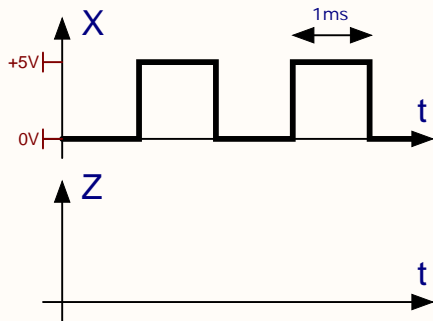
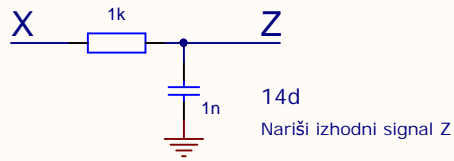
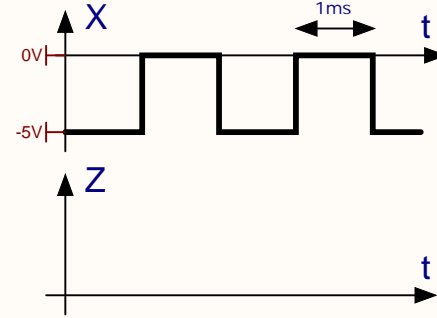
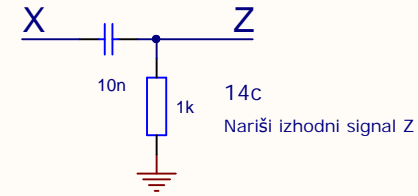
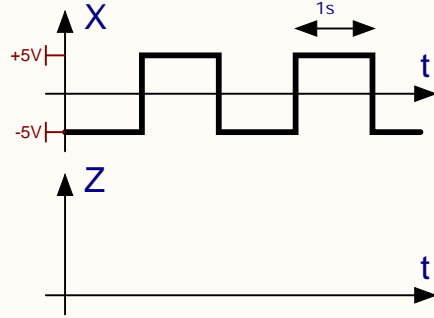
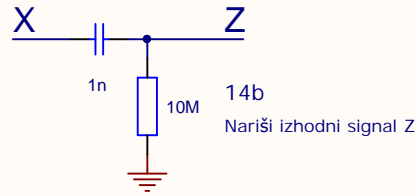
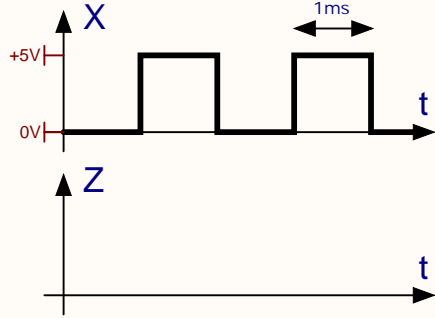
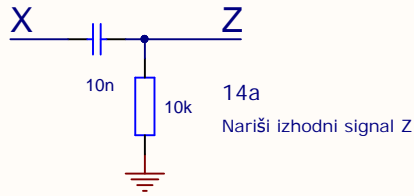


13f

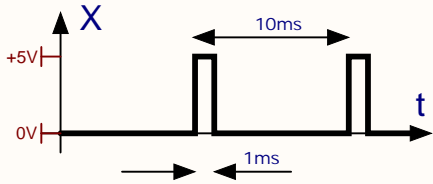
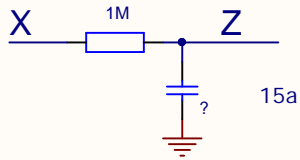
Ojačenje vezja je ?

Zapiši Z v odvisnosti od X in Y

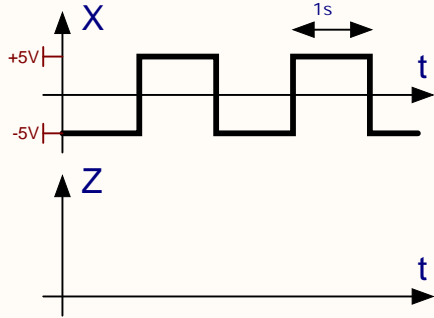
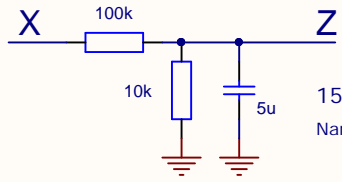
Title		
Size A4	Number	Revision
Date: 3.4.2017	Sheet of	
File: D:\MyDocuments\...\07 OPAMP.SchDoc	Drawn By:	



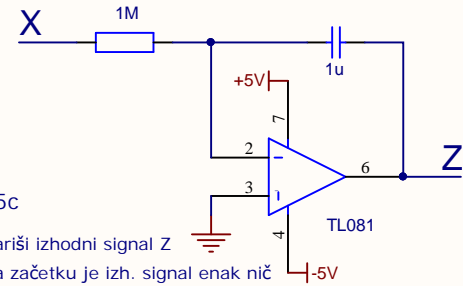
Title		
Size A4	Number	Revision
Date: 3.4.2017	Sheet of	
File: D:\MyDocuments\...\08 RC.SchDoc	Drawn By:	



Izberi C tako, da bo izhodni signal povprečna vrednost vhodnega
Utemelji izbiro!

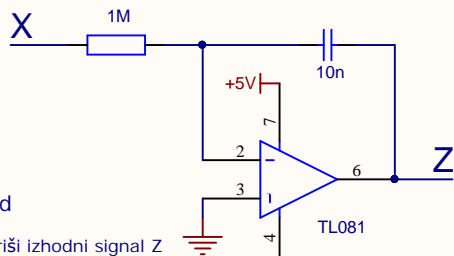
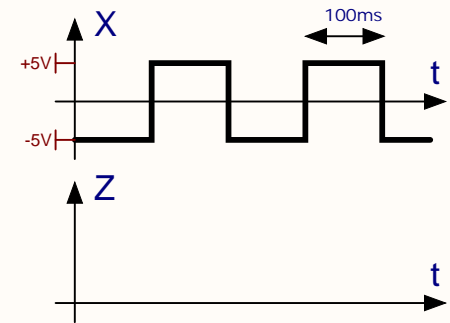


Nariši izhodni signal Z



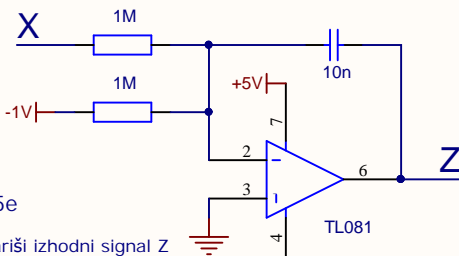
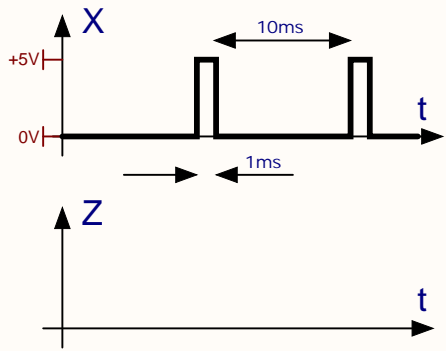
15c

Nariši izhodni signal Z
Na začetku je izh. signal enak nič



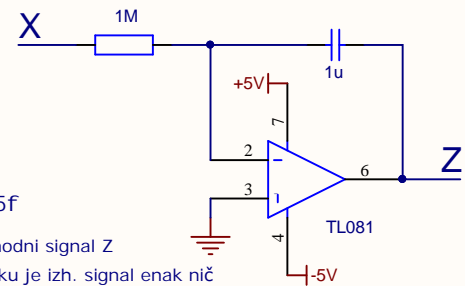
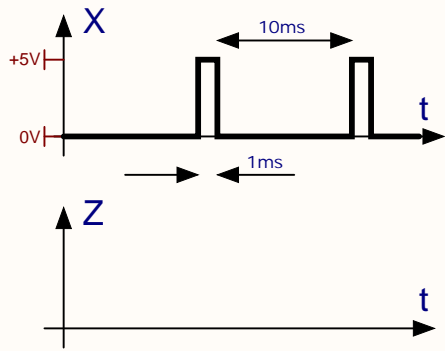
15d

Nariši izhodni signal Z
Na začetku je izh. signal enak nič



15e

Nariši izhodni signal Z
Na začetku je izh. signal enak nič



15f

Nariši izhodni signal Z
Na začetku je izh. signal enak nič
Na vhod ob času T=0 priključimo sinusni signal z amplitudo 1V in frekvenco 1Hz

Title		
Size	Number	Revision
A4		
Date:	3.4.2017	Sheet of
File:	D:\MyDocuments\...\09 RC.SchDoc	Drawn By: